



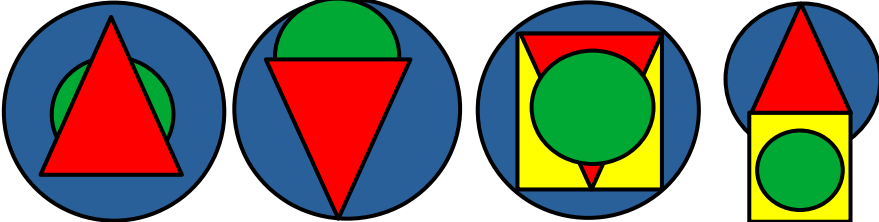








La semaine des mathématiques 2021

MS



EPREUVE	ÉNONCÉ	VALIDATION																				
<p>1 LE TRAIN</p>																						
<p>2 LE MUR</p>																						
<p>3 REPRODUCTION GÉOMÉTRIQUE</p>																						
<p>4 LA FERME D'ANNICK</p>	 <p>2 VACHES 1 POULE 1 LAPIN</p>																					
<p>5 LES OEUFS</p>	 <p>9 OEUFS 3 PANIERS</p>																					
<p>6 LA FERME</p>	<table border="1" data-bbox="491 1597 1031 1798"> <thead> <tr> <th></th> <th>A</th> <th>B</th> <th>C</th> </tr> </thead> <tbody> <tr> <td></td> <td>3</td> <td>4</td> <td>3</td> </tr> <tr> <td></td> <td>4</td> <td>5</td> <td>5</td> </tr> <tr> <td></td> <td>5</td> <td>2</td> <td>2</td> </tr> <tr> <td></td> <td>6</td> <td>3</td> <td>6</td> </tr> </tbody> </table>		A	B	C		3	4	3		4	5	5		5	2	2		6	3	6	
	A	B	C																			
	3	4	3																			
	4	5	5																			
	5	2	2																			
	6	3	6																			